


Mathletics



Geometry

My name _____



Copyright © 2009 3P Learning. All rights reserved.

First edition printed 2009 in Australia.

A catalogue record for this book is available from 3P Learning Ltd.

ISBN 978-1-921860-64-5

Ownership of content The materials in this resource, including without limitation all information, text, graphics, advertisements, names, logos and trade marks (Content) are protected by copyright, trade mark and other intellectual property laws unless expressly indicated otherwise.

You must not modify, copy, reproduce, republish or distribute this Content in any way except as expressly provided for in these General Conditions or with our express prior written consent.

Copyright Copyright in this resource is owned or licensed by us. Other than for the purposes of, and subject to the conditions prescribed under, the Copyright Act 1968 (Cth) and similar legislation which applies in your location, and except as expressly authorised by these General Conditions, you may not in any form or by any means: adapt, reproduce, store, distribute, print, display, perform, publish or create derivative works from any part of this resource; or commercialise any information, products or services obtained from any part of this resource.

Where copyright legislation in a location includes a remunerated scheme to permit educational institutions to copy or print any part of the resource, we will claim for remuneration under that scheme where worksheets are printed or photocopied by teachers for use by students, and where teachers direct students to print or photocopy worksheets for use by students at school. A worksheet is a page of learning, designed for a student to write on using an ink pen or pencil. This may lead to an increase in the fees for educational institutions to participate in the relevant scheme.

Published 3P Learning Ltd

For more copies of this book, contact us at: www.3plearning.com/contact

Designed 3P Learning Ltd

Although every precaution has been taken in the preparation of this book, the publisher and authors assume no responsibility for errors or omissions. Neither is any liability assumed for damages resulting from the use of this information contained herein.

Series E – Geometry

Contents

Topic 1 – Lines, angles and shapes (pp. 1–13)

Date completed

- parallel and perpendicular lines _____
- angles _____
- polygons and quadrilaterals 1 _____
- triangles _____
- types of quadrilaterals _____
- polygons and quadrilaterals 2 _____
- other polygons _____
- symmetry _____
- symmetrical challenges – *create* _____

Topic 2 – Investigating 3D shapes (pp. 14–16)

- properties of shapes _____
- different viewpoints _____
- painted cube – *solve* _____

Topic 3 – Position (pp. 17–26)

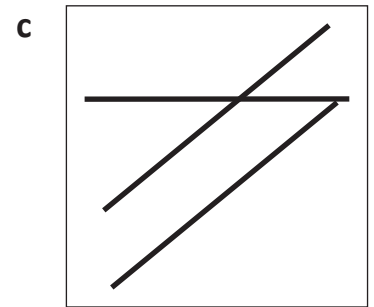
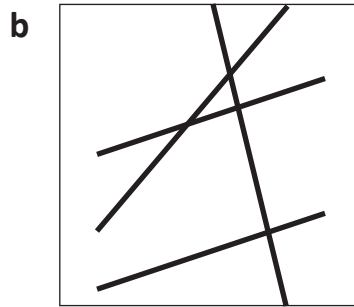
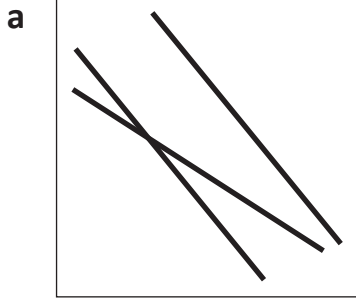
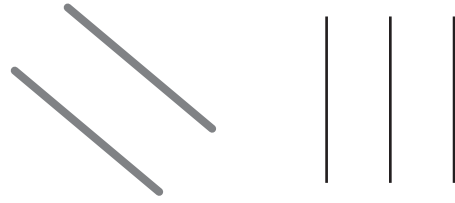
- describing position _____
- following directions _____
- translations _____
- grids and coordinates _____
- using a map _____
- compass directions _____
- hit the points – *apply* _____

Series Author:

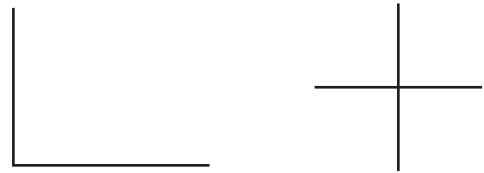
Nicola Herringer

Lines, angles and shapes – parallel and perpendicular lines

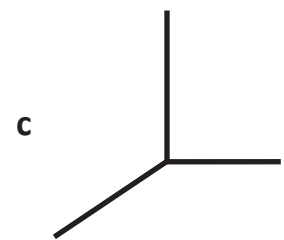
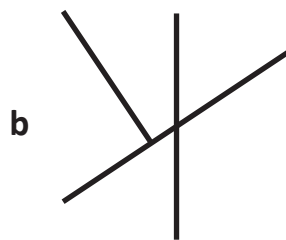
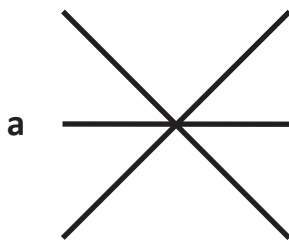
Parallel lines are always the same distance away from each other at any point and can never meet. They can be any length and go in any direction.



Perpendicular lines meet at right angles. Sometimes they intersect (cross over), sometimes they do not intersect.



2



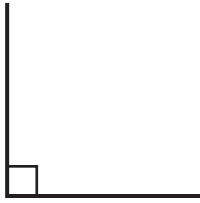
3 In this space, draw three pairs of parallel lines and three pairs of perpendicular lines:

Lines, angles and shapes – angles

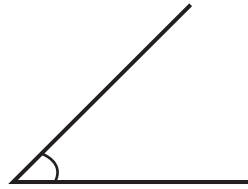
An angle is the amount of turning between two lines that meet.

There are three classifications of angles depending on their size.

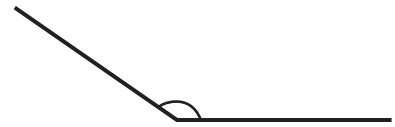
A right angle is 90° (degrees).



An acute angle is smaller than a right angle.

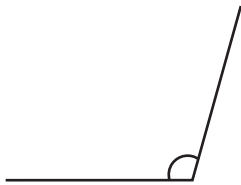


An obtuse angle is larger than a right angle.

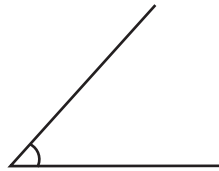


1 Classify each angle as right, acute or obtuse.

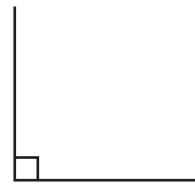
a



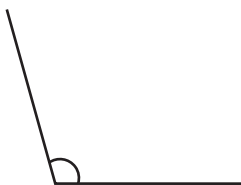
b



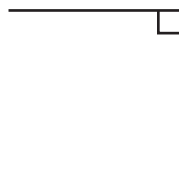
c



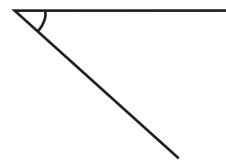
d



e

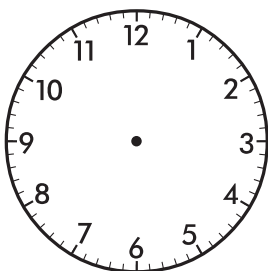


f

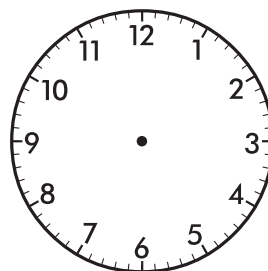


2 Draw hands on each clock that show a time for each type of angle.

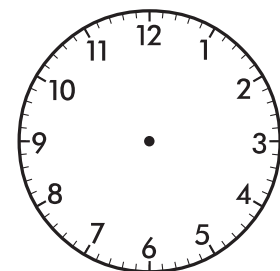
a Right angle



b Obtuse angle



c Acute angle



Lines, angles and shapes – angles

3 Use your ruler to draw three more examples of each type of angle.

a Right angles



b Acute angles



c Obtuse angles

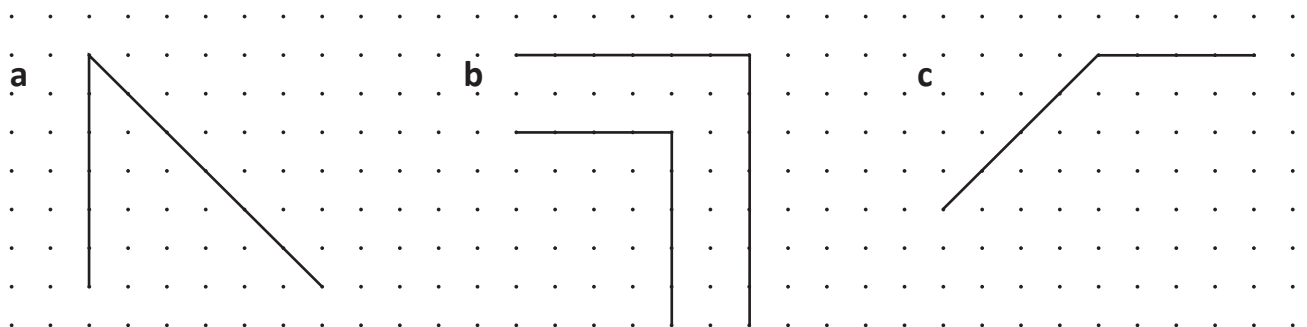


4 Complete each closed shape according to the directions:

Shape **a** has 2 acute angles.

Shape **b** has 5 right angles.

Shape **c** has 2 acute and 2 obtuse angles.

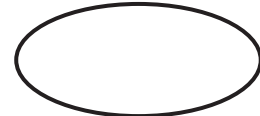

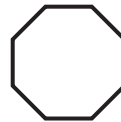



Lines, angles and shapes – polygons and quadrilaterals 1

Polygons are 2D shapes with straight sides.

Quadrilaterals are polygons with four sides.

1 Tick the polygons. Circle the quadrilaterals.



2 Complete this table:

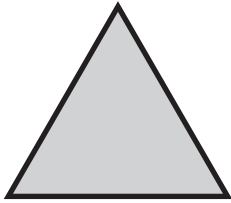
	Name	Number of sides	Number of angles
a	rhombus		
b	pentagon		
c	trapezium		
d	octagon		
e	hexagon		
f	square		
g	rectangle		
h	triangle		

3 Name four quadrilaterals:


4 Why is a circle not a polygon?

Lines, angles and shapes – triangles

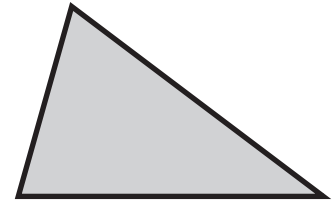
Triangles are polygons with three straight sides. there are three types of triangles:



An equilateral triangle has three angles the same and three sides the same length.

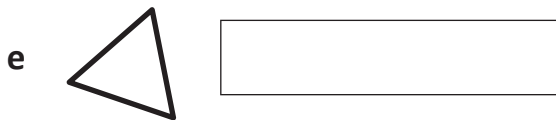
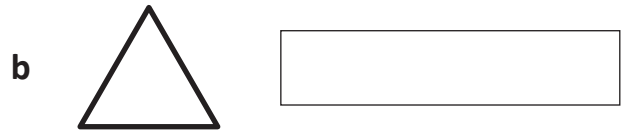
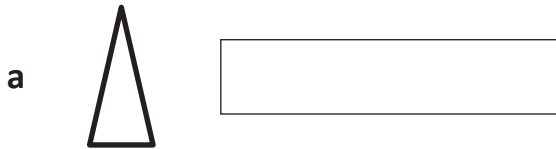


An isosceles triangle has two angles the same and two sides the same length.



A scalene triangle has different length sides and all its angles are different.

1 Name each type of triangle:



2 Draw six different triangles. Make two equilateral, two isosceles and two scalene:



Lines, angles and shapes – types of quadrilaterals

A parallelogram is a quadrilateral with two pairs of parallel sides.

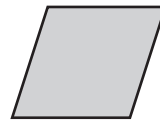
This is a parallelogram. Its opposite sides are an equal length and are parallel to each other.



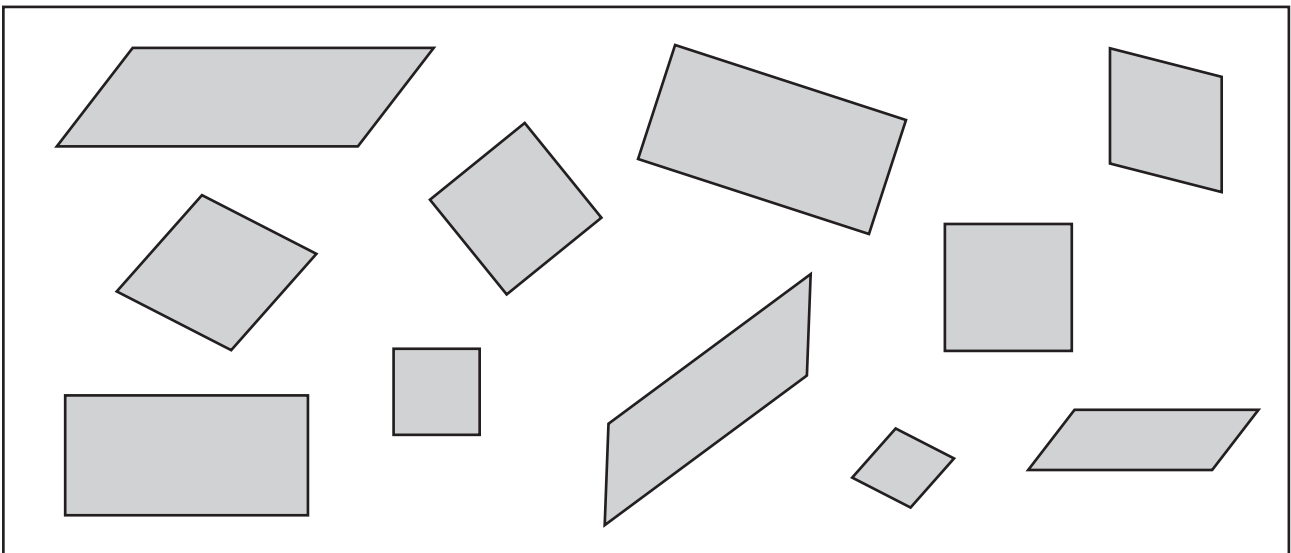
A square and a rectangle are also parallelograms. They have opposite sides that are equal lengths and are parallel to each other.



A rhombus is a parallelogram. Its opposite sides are an equal length and are parallel to each other. It has four equal sides.



1 How many pairs of parallel lines are there in these parallelograms?
Count them:

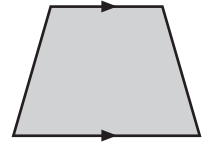


2 Write the number of shapes you can see in the box above.

	Name	Number of shapes
a	rhombuses	
b	squares	
c	rectangles	
d	parallelograms	
e	quadrilaterals	


Lines, angles and shapes – types of quadrilaterals

A trapezium is a quadrilateral that has one pair of parallel sides.




3 Check your understanding of types of parallelograms and trapeziums.

a Draw a shape with two pairs of parallel sides and sides that are all equal in length.




This shape is a _____.

b Draw a shape with one pair of parallel sides.




This shape is a _____.

c Draw a shape with two pairs of parallel sides and opposite sides that are equal.



This shape is a _____.

d Draw another parallelogram that is different to the others.




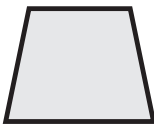

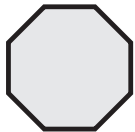
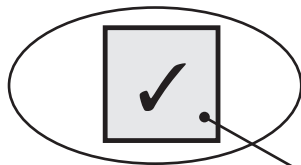
This shape is a _____.

Lines, angles and shapes – polygons and quadrilaterals 2

1 Decide whether each shape in the table is a quadrilateral or a polygon or both. Write yes or no.

	Name	Quadrilateral	Polygon
a	square		
b	rectangle		
c	hexagon		
d	octagon		
e	pentagon		
f	triangle		

2 Draw lines to connect the shapes to the labels. Then put a tick in the shapes which are quadrilaterals and circle the parallelograms. The first one has been done for you.



rhombus

square

rectangle

pentagon

hexagon

trapezium

octagon

Some labels might have more than one connecting line.



4 sides

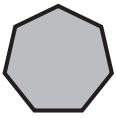
5 sides

6 sides

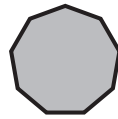
8 sides

Lines, angles and shapes – other polygons

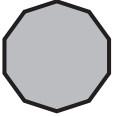
There are a number of other polygons:



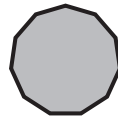
A **heptagon** has **7** sides.




A **nonagon** has **9** sides.



A **decagon** has **10** sides.



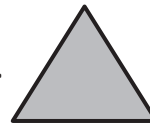
A **hendecagon** has **11** sides.



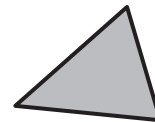
A **dodecagon** has **12** sides.

These shapes are all shown as **regular** polygons. The length of sides and size of angles in a regular polygon are always the same. If they are not all the same, we describe the shape as **irregular**.

So, an equilateral triangle is a regular triangle.

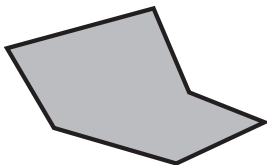


Isosceles and scalene triangles are irregular.




1 Name these irregular polygons:

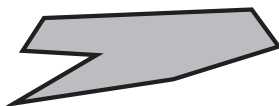
a




b



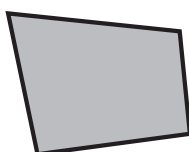
c



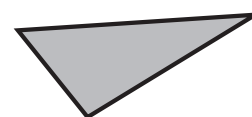
d



e



f



Lines, angles and shapes – other polygons

2 Draw five irregular shapes below – a quadrilateral, a pentagon, an octagon, a nonagon and a dodecagon:

3 Are these polygons regular or irregular?

a		<input type="text"/>	b		<input type="text"/>
c		<input type="text"/>	d		<input type="text"/>
e		<input type="text"/>	f		<input type="text"/>

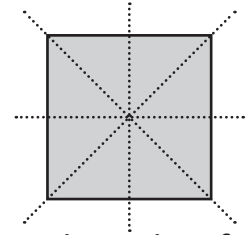
4 Explain how you know these shapes are irregular polygons:

a _____

b _____

Lines, angles and shapes – symmetry

A shape is symmetrical when you can fold it in half so that one half exactly covers the other half. The fold line is the line of symmetry. Many 2D shapes have more than one line of symmetry.



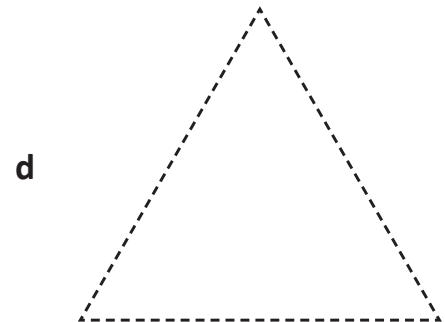
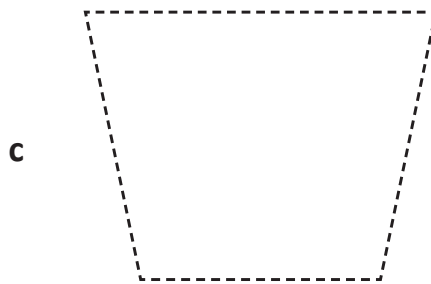
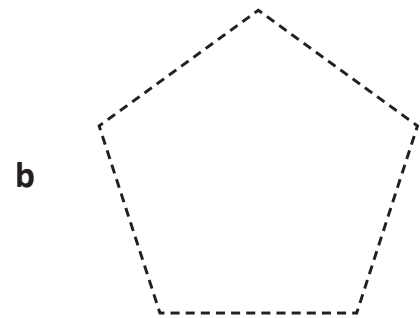
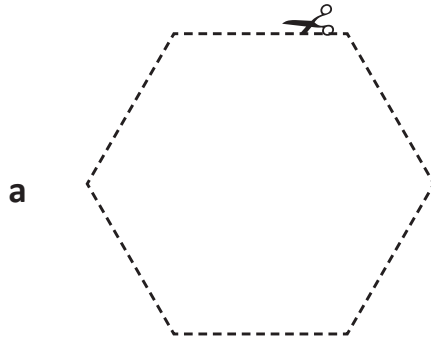
This shape has four lines of symmetry.

1

Copy this page and cut out each shape.

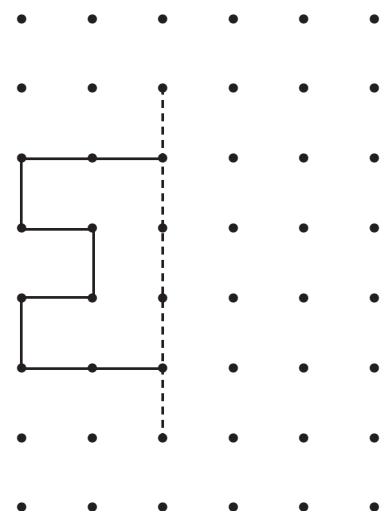

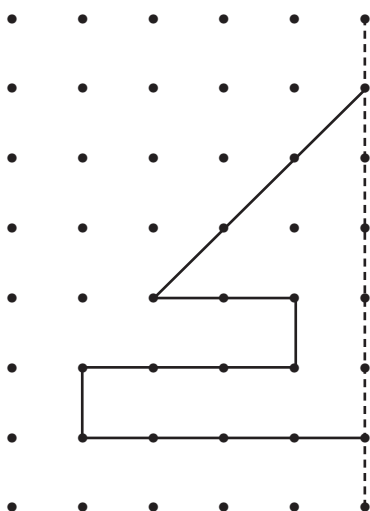


Find all the lines of symmetry. See how many different ways you can fold each shape in half. Then draw in all the lines of symmetry on the shapes on this page.




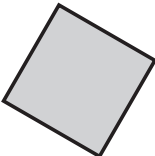
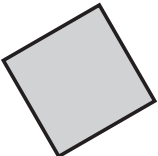
2

Use the line of symmetry and a ruler to complete each shape.

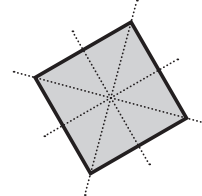
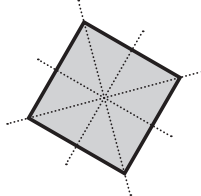
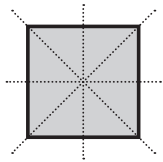


Lines, angles and shapes – symmetry


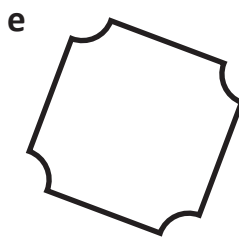
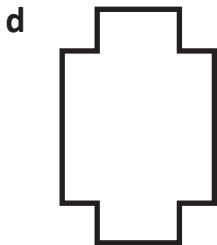



Shapes are not always presented in their 'normal' orientation.

For example, this is a square  but so is this  and this 

To work out a shape's lines of symmetry, it often helps to try to 'straighten' it in your mind.




3 Draw all possible lines of symmetry on these shapes:

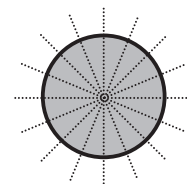


THINK

How many lines of symmetry does a circle have?



Any straight line that goes through the centre of a circle is a line of symmetry. There is no limit to the number of slightly different lines that could go through the centre of a circle, so we say it has **infinite** lines of symmetry.

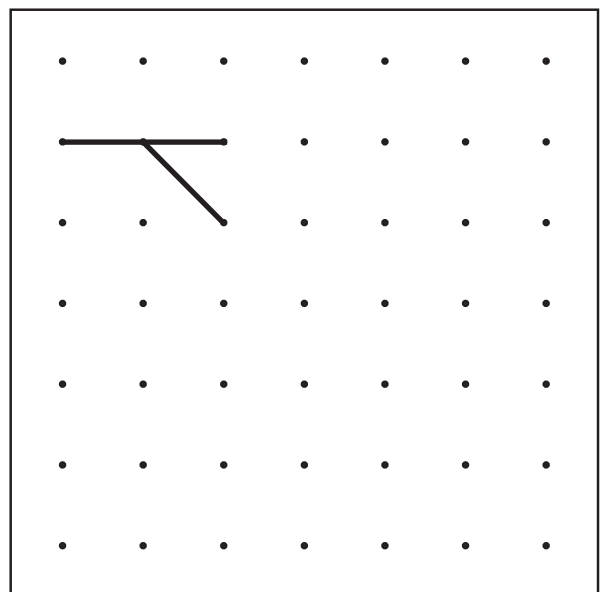
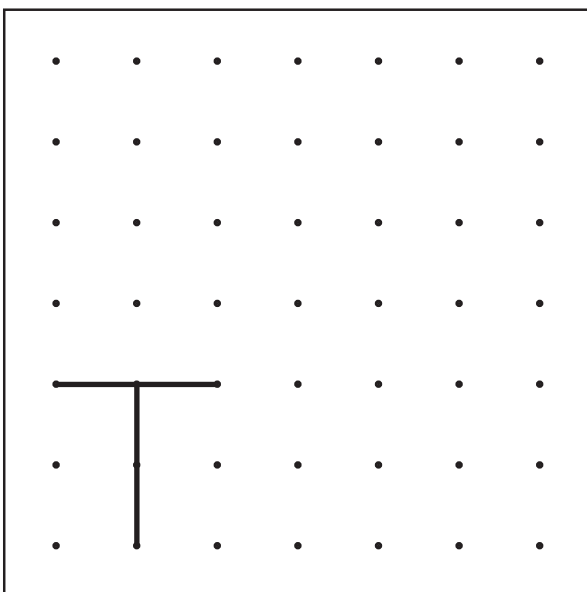
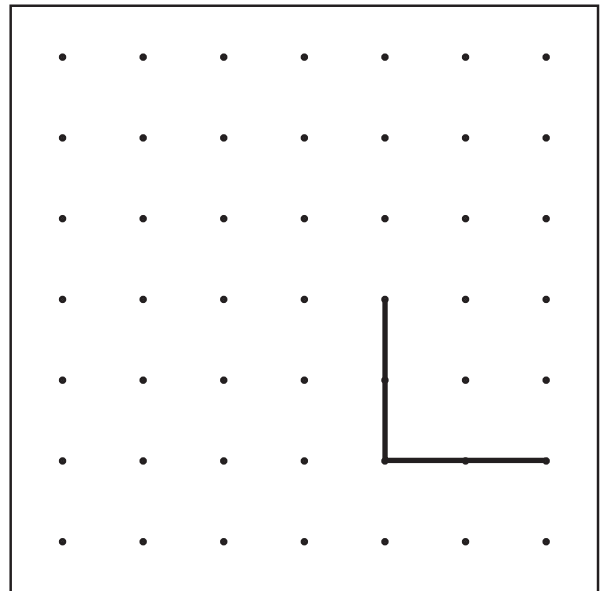
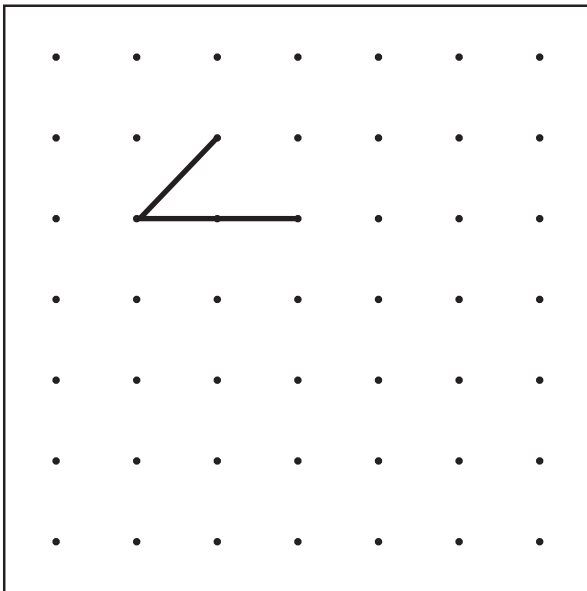




For these challenges, you will need a ruler and a pencil.



Here are four unfinished symmetrical designs on dot paper. You must complete them. For each design, you must use a horizontal line, a vertical line and two diagonal lines. When they are finished, they will each be symmetrical. For each design, decide where the line of symmetry will be. Pretend the line is a mirror – what will the reflection look like?



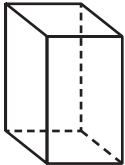
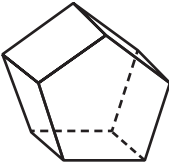
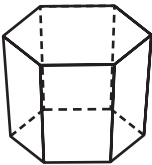
Investigating 3D shapes – properties of shapes

In this topic, we are looking at the properties of 3D shapes. The pointy corner of a 3D shape is called a vertex. The plural is vertices.

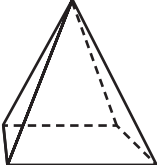
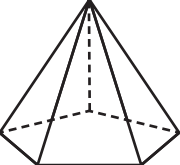
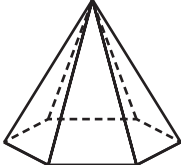
Prisms have two bases that are the same size and shape and are a type of polygon. (Note that a cuboid is a rectangular prism.)

Pyramids have only one base. All the faces are triangular and they meet at a common vertex also known as the apex.

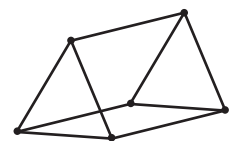
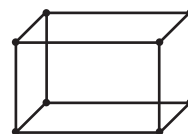
1 Complete the properties of these prisms:

	a 	b 	c 
Name			
Faces			
Vertices			
Edges			

2 Complete the properties of these pyramids:

	a 	b 	c 
Name			
Faces			
Vertices			
Edges			

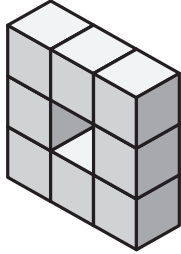
- 3 Mahlia made a 3D shape using toothpicks and plasticine. She used nine toothpicks and six pieces of plasticine. Circle the shape she made.



Investigating 3D shapes – different viewpoints

1 Here are some 3D models made from cubes. Shade in the squares on each grid to show the top, front and side view for each one. The top view of the first model has been done for you.

a

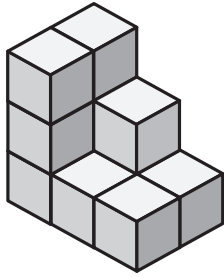


Top view

Front view

Side view

b

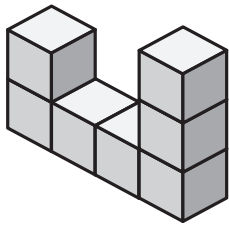


Top view

Front view

Side view

c

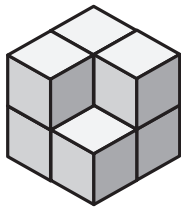


Top view

Front view

Side view

d



Top view

Front view

Side view



Getting ready

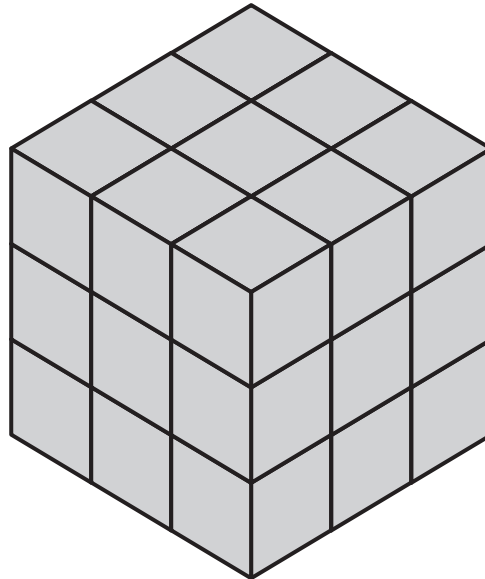
Matilda built a cube from 27 smaller cubes. She then dipped the large cube in blue paint. When it was completely dry, she broke it up into the smaller cubes.



What to do

Use the table below to predict the following:

- How many small cubes have three faces covered with paint?
- How many small cubes have two faces covered with paint?
- How many small cubes have one face covered with paint?
- How many small cubes have no faces covered with paint?




	Number of faces covered in paint	Number of small cubes
a	3	
b	2	
c	1	
d	0	
	Total	

Position – describing position

When we use terms such as left and right, where we are in relation to the object changes.

1 Look carefully at each person's position and circle either left or right in each sentence:

- a The grapes are on the left / right of Roger.
- b The cupcakes are on the left / right of Jo.
- c The sandwiches are on Lily's left / right.
- d The jug is on Rachel's left / right.
- e Jo is sitting on the left / right of Lily.
- f Roger is sitting on the left / right of Rachel.



2 Solve this riddle:

What is so fragile that even saying it out loud can break it?

a	b	c	d	e	f	g	

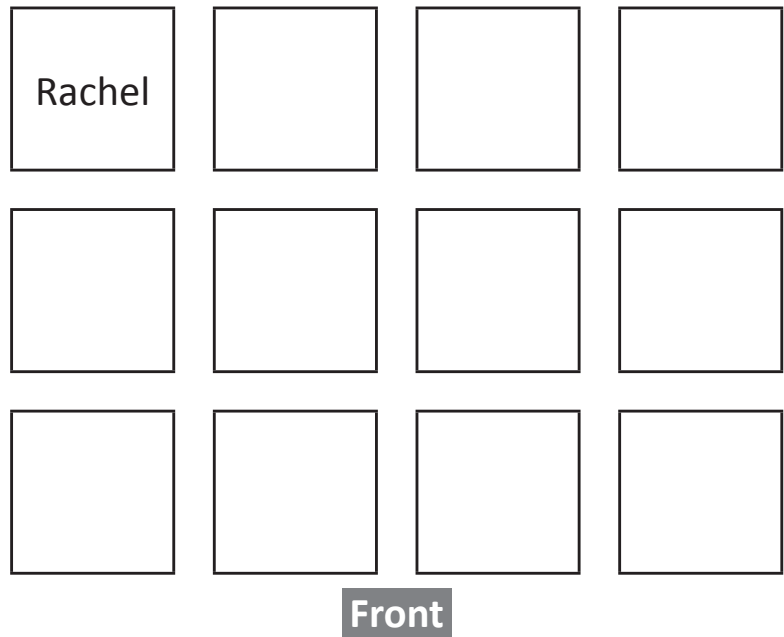
A	L	F	G	C
H	M	P	I	B
E	O	X	E	J
R	W	S	Y	N

- a Bottom row, third column from left.
- b Third row from bottom, second column from right.
- c Top row, second column from left.
- d Second row from bottom, first column.
- e Bottom row, column on far right.
- f Top row, column on far right.
- g Second row from bottom, first column.

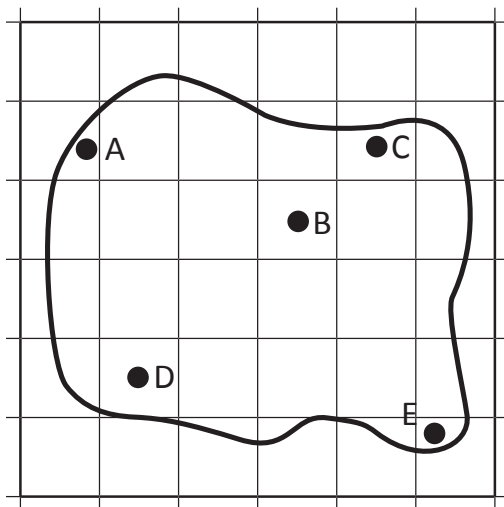
Position – describing position

3 Write the names of each student according to Miss Flenley’s seating plan:

- a Josh is in front of Rachel.
- b Emily is in front row second from the right.
- c Karl is behind Emily.
- d Liam is in middle row on the far right.
- e Bec is on Emily’s left.
- f Gina is behind Karl.
- g Megan is between Josh and Karl.
- h Lyn is on Gina’s left.
- i Jo is in front of Megan.
- j Simon is next to Gina.
- k Andrew is in front of Josh.



4



Here is a map showing the best secret hiding spots in a backyard.

- A = Behind the washing line
- B = Behind the garage
- C = Up the tree
- D = Around the side of the house
- E = Next to the recycling bins

Where are these kids hiding? Write the letter.

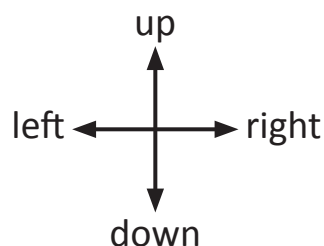
- a Ellie is row 2, column 2.
- b George is row 1, column 6.
- c Akhil is row 5, column 1.
- d Bri is row 4, column 4.
- e Taylor is row 5, column 5.

Hint: Row 1 is the bottom row.




Position – following directions

On this page, you will practise following the directions **up**, **down**, **left** and **right**.



- 1 Three kids are playing a computer game where they have to move through as many stars as possible to get the most points. Colour each player's paths according to the directions below:



- a Gemma's path is: Start in the bottom row; 6th square from the left; 1 up; 3 squares left; 6 squares up; and 2 squares left.
- b Azumi's path is: Start in the 2nd row from the bottom on the right; 2 squares up; 3 squares left; 2 squares up; 3 squares right; and 2 squares up.
- c Tyler's path is: Start in the bottom row; 1st square on the right; 2 squares left; 2 squares up; 3 squares left; 5 squares up; and 1 square right.
- d A star is worth 10 points, what was each player's score?

Gemma

Azumi

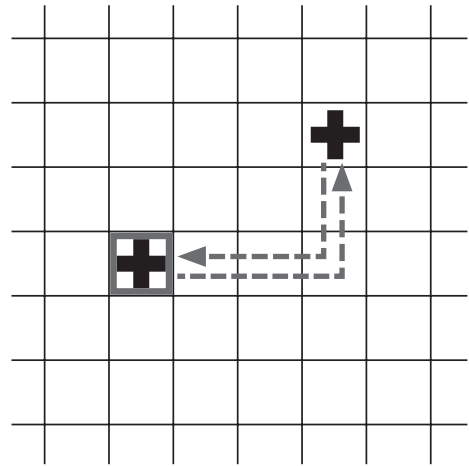
Tyler

Position – translations

'Sliding' a shape from one position to another without turning it can be described as a **translation**.

We can translate the top cross into the square by moving it 2 squares down and 3 squares left.

We could translate it back again by moving it 3 squares right and 2 squares up.

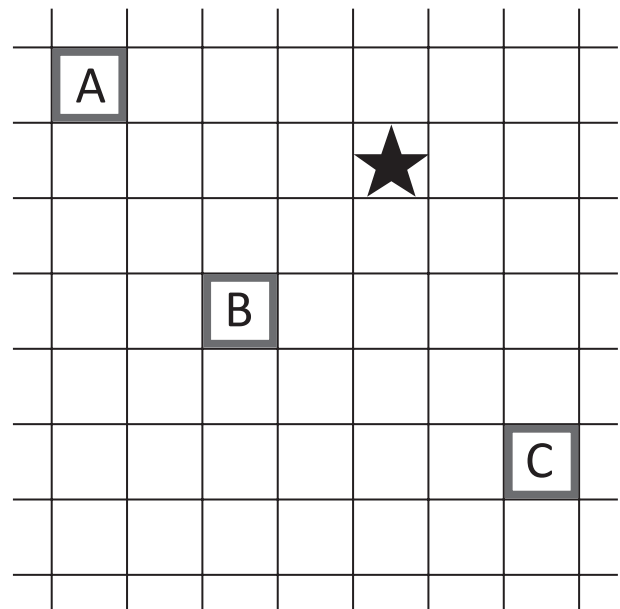


1 Describe the following translations of the star:

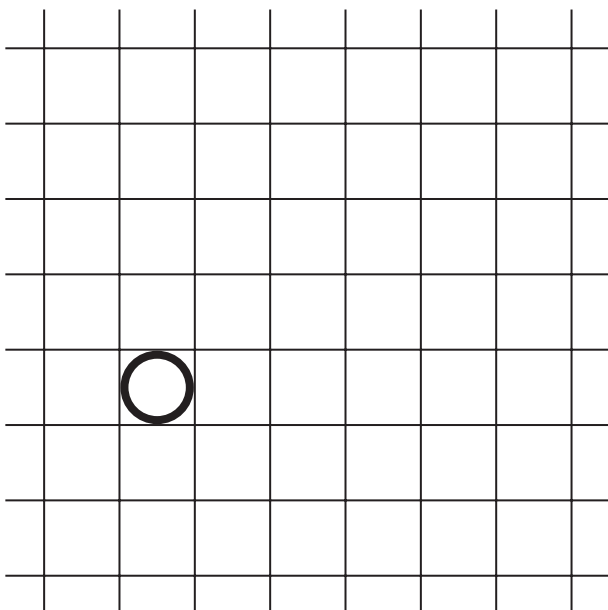
a to square A

b to square B

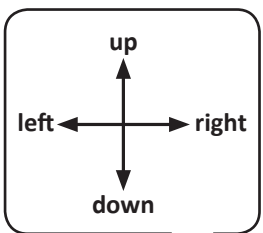
c to square C



2



Show these translations of the circle by drawing the circle in the new position with a '1' inside it for the first translation, a '2' for the second and '3' for the third.



a 3 up, 5 right

b 2 up, 1 left

c 2 down, 6 right



Position – grids and coordinates

Maps are often set up in a grid with letters and numbers down the sides. We use these letters and numbers to pinpoint a particular part of the map.

Sometimes, it is the rows and columns that are labelled.

	A	B	C	D
1				
2				
3		●		
4				

Other times it is the lines that are labelled.

	A	B	C	D
1				
2				
3		●		
4				

1 Answer the questions about what is in each part of the grid.

- a Name the shape at C4. _____
- b Multiply the number at A2 by 3. _____
- c Name the shape at B2. _____
- d Add the numbers at D1 and A1. _____

1	12	●	■	2
2	9	⬡	6	16
3	⬡	5	T	4
4	▲	↓	⬡	8
	A	B	C	D

- e What is different about the shape at B1 compared with the other shapes in this grid?
- _____

2 Plot and join the following points. What picture have you made?

- a D1 to A3, A3 to C3, C3 to C7, C7 to E7, E7 to E3, E3 to G3, G3 to D1.

	A	B	C	D	E	F	G	H
1								
2								
3								
4								
5								
6								
7								
8								

Picture: _____

- b E1 to D4, D4 to A4, A4 to C6, C6 to B9, B9 to E7, E7 to H9, H9 to G6, G6 to I4, I4 to F4, F4 to E1.

	A	B	C	D	E	F	G	H	I
1									
2									
3									
4									
5									
6									
7									
8									
9									

Picture: _____

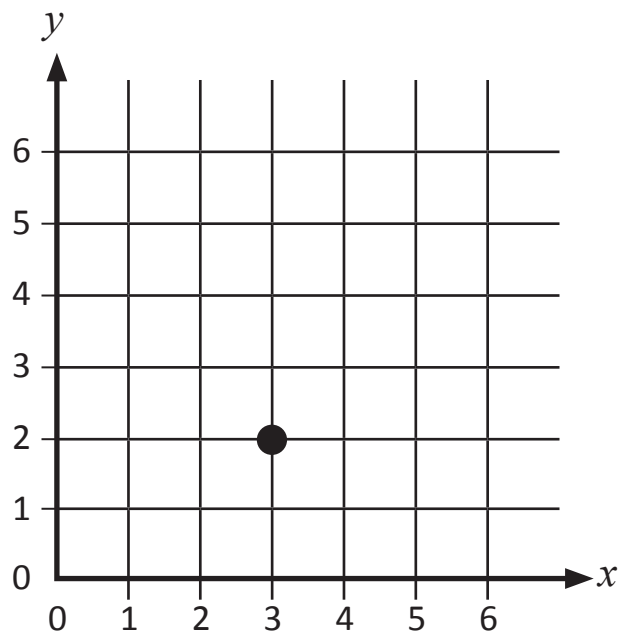
Position – grids and coordinates

When we draw grids and use coordinates in maths we usually use grids like this.

The horizontal and vertical lines at the edges are called the **axes**. The horizontal line is the **x axis** and the vertical line is the **y axis**.

Instead of using numbers on one axis and letters on the other, we use numbers on both. The numbers always sit on a line, never a space between lines, so coordinates will always describe a point where two lines cross.

If we want to describe a particular point we **always** write the x coordinate first, followed by the y coordinate. So, the point shown above is **(3, 2)**.



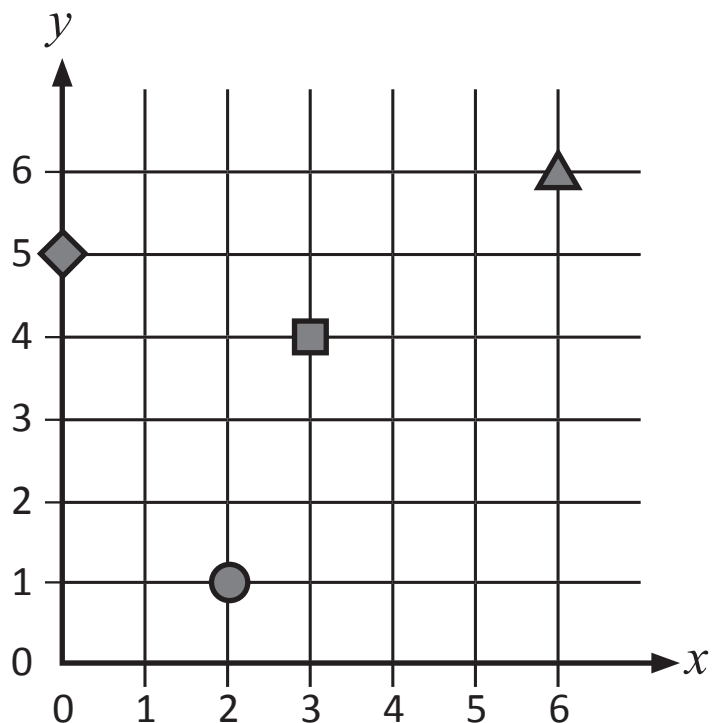
3 Write the coordinates where you find each shape:

a 

b 

c 

d 



Position – grids and coordinates

4 Draw and label x and y axes. Then place the following shapes at the correct locations:


a a square at (3, 1)

b a triangle at (5, 0)

c a star at (4, 2)

d a circle at (2, 6)

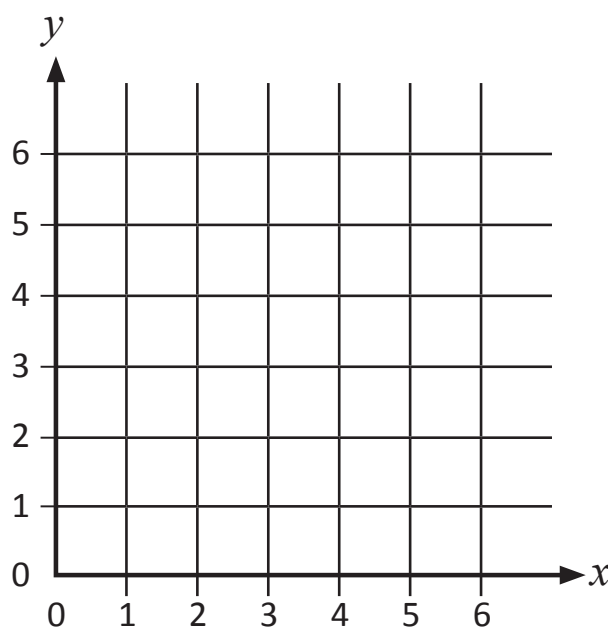
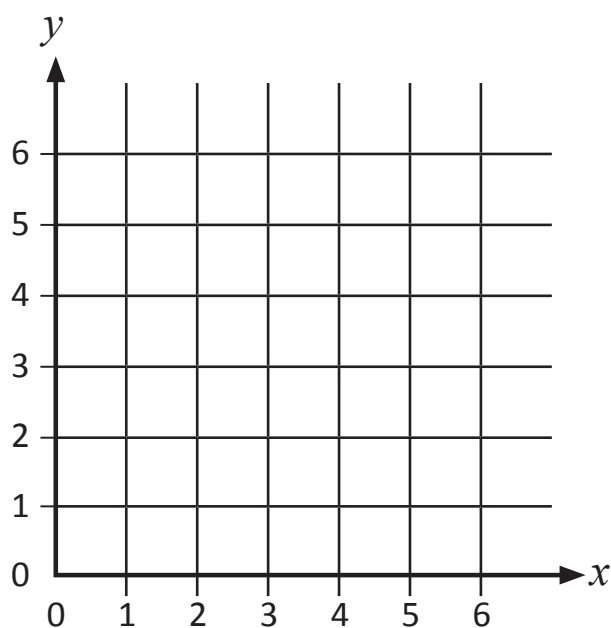
e a heart at (1, 3)



5 Draw straight lines with a ruler from each coordinate to the next to create a shape:

a (1, 1) to (5, 1); (5, 1) to (5, 5);
(5, 5) to (1, 5); (1, 5) to (1, 1)

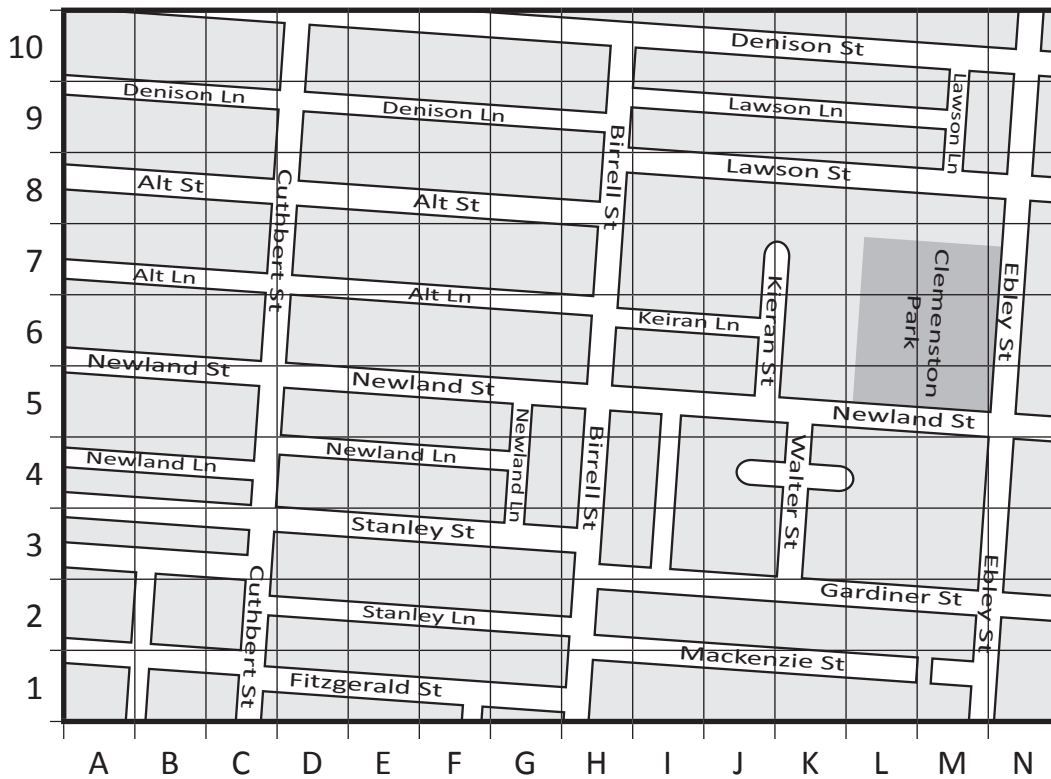
b (3, 6) to (1, 1); (1, 1) to (5, 1);
(5, 1) to (3, 6)



Position – using a map

Here is a map from a street directory. When you learn to drive, you will sometimes use a street directory to find out how to get somewhere that you do not know the directions to.

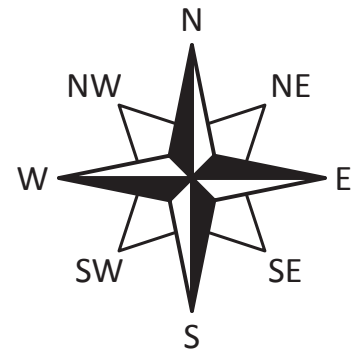
1 Look carefully at this map and answer the questions below:



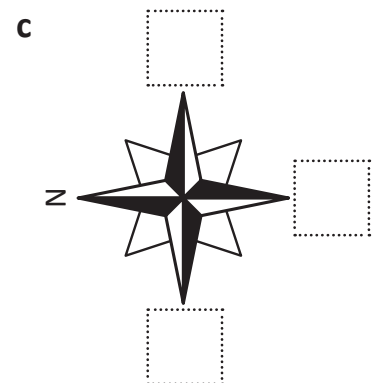
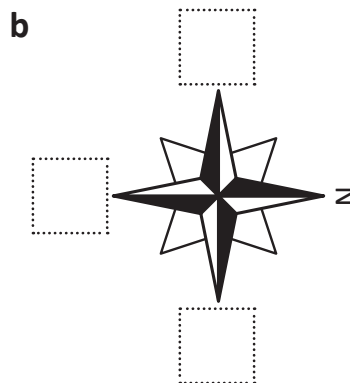
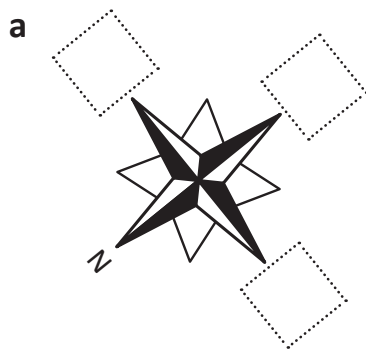
- a Which street is at E4? _____
- b What is parallel to Denison Lane at E8? _____
- c Which street is at L9? _____
- d What are the coordinates that best pinpoint the intersection of Birrell St and Newland St? _____
- e Draw one way to get from the corner of Lawson St and Ebley St to the corner of Cuthbert and Fitzgerald St.
- f Describe how to get to Clemenston Park from B8.

Position – compass directions

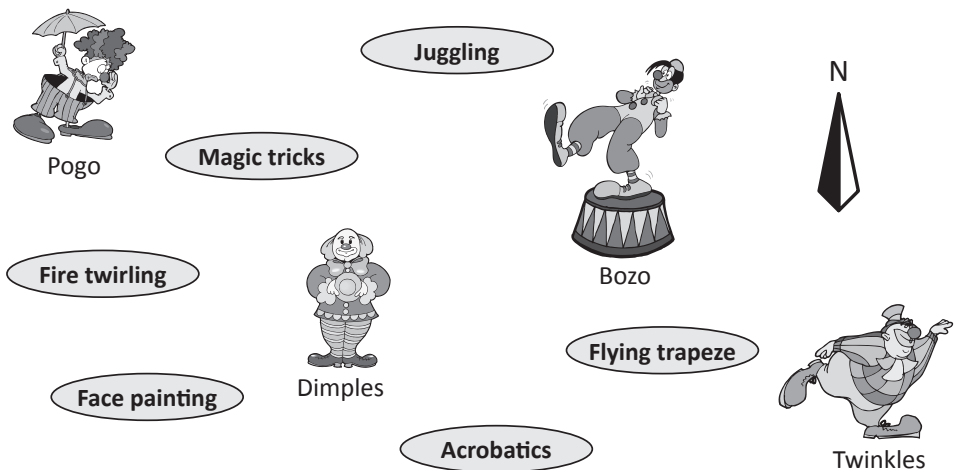
We can use a compass to help us with direction.
 There are four main points on a compass:
 N – north S – south E – east W – west
 The points in between the four main points help us describe position more accurately.
 NW – north west NE – north east
 SE – south east SW – south west



1 On each compass, some directions are missing. Fill in the missing ones:



2 Here are four clowns that must find their way to class at circus school. Write the direction that each clown needs to go to get to their class in the spaces below. Take note of where north is.



- Pogo is going _____ to the acrobatics class.
- Dimples is going _____ to the juggling class.
- Bozo is heading _____ to the face painting class.
- Twinkles is heading _____ to the magic tricks class.
- Once Twinkles is at the magic tricks class, which direction will he go to get to the flying trapeze class? _____

Hint: Use the points between the four main points.



Hit the points

apply



Getting ready

This is a game for two players. You will need four copies of this page (two grids for each player) and 10 counters.



copy



What to do

Each player places all 10 counters in different positions on their grid without the other player seeing. Take turns to find each other's counters by calling out coordinates. The aim of the game is to find out where all the counters are before the other player does. Don't waste your guesses. Keep track of your guesses by marking them on the second grid.

A											
B											
C											
D											
E											
F											
G											
H											
I											
J											
	1	2	3	4	5	6	7	8	9	10	